

IPS | BUTLER UNIVERSITY
LAB SCHOOL 55

1349 E 54th Street
Indianapolis, IN 46220
(317)226-4255

Inspiring children to transform the world.

Additional Math Homework Resources

The following worksheets feature skills that your child will learn this school year. Please feel free to use these worksheets to supplement your child's learning at home. Keep in mind that different units of study are covered throughout the year. Depending on timing, there may be skills in the packet that your child hasn't learned yet.

For any word problem pages, we recommend doing one problem a night and reading the problem with your child (or to your child depending on their age). We recommend giving your child a whole sheet of paper to solve the problem and allowing them to solve it in whatever way makes sense to them (i.e. drawing a picture, using a number line, etc.). Once your child has solved the problem one way encourage them to solve it another way and check their work.

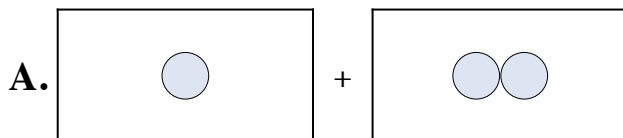
If these worksheets are helpful to you visit <https://www.commoncoresheets.com/SortedByGrade.php> to find more!

If you have questions about additional work for your child, please contact your classroom teacher.

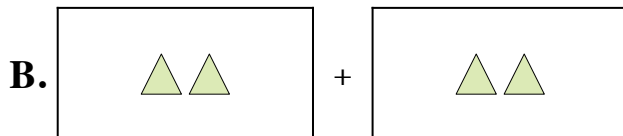


Match each addition equation to its visual equivalent.

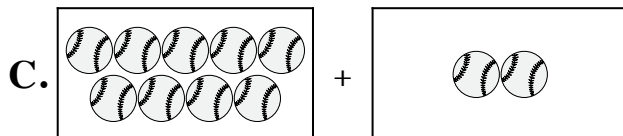
1) $9 + 2$



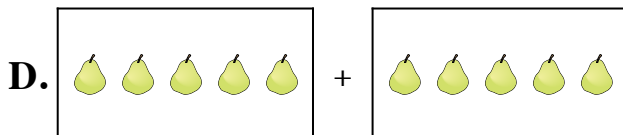
2) $2 + 6$



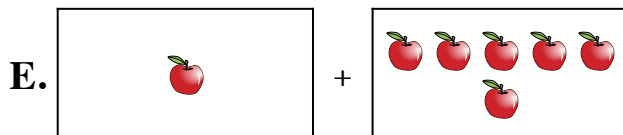
3) $1 + 2$



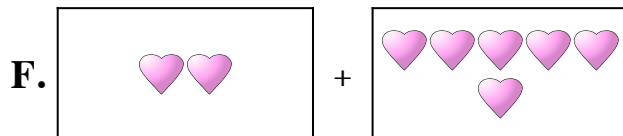
4) $1 + 6$




5) $3 + 4$




6) $10 + 10$



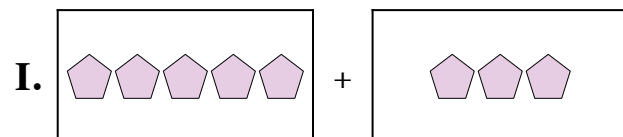
7) $5 + 3$



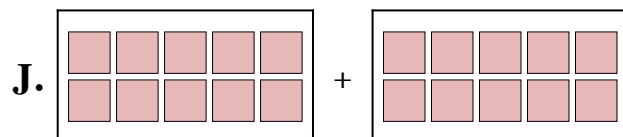
8) $7 + 10$



9) $2 + 2$



10) $5 + 5$



Answers

1. _____

2. _____

3. _____

4. _____

5. _____

6. _____

7. _____

8. _____

9. _____

10. _____

**Solve each problem.**

- 1) Wendy had eleven fish and her sister had six fish. How many fish did they have total?
- 2) At the arcade Sam had won seven tickets. Later he won six more tickets. How many tickets did Sam have total?
- 3) Adam collected eight seashells from the beach on Monday and six more on Tuesday. How many seashells did Adam collect all together?
- 4) Bianca had four pencils in her desk and four more in her backpack. How many did she have total?
- 5) Luke had eight books. During the book fair he bought three more. How many books did Luke have total?
- 6) A baker already had fifteen cakes but made three extra. How many cakes did the baker have total?
- 7) There were eight people in line at lunch when four more got in line. How many people were there total in line?
- 8) There were five people on the bus. At the next stop two more people got on the bus. How many people are there on the bus now?
- 9) Oliver walked eight miles on Monday and three more on Tuesday. How many miles did Oliver walk?
- 10) Janet picked up five pieces of paper from the floor. If Billy picked up five pieces, how many did they pick up total?
- 11) Kaleb was packing up his old toys. He filled seven boxes with action figures and two boxes with old games. How many boxes did he pack total?
- 12) Lana spent nine minutes drawing at school and five minutes drawing at home. How many minutes total did she spend drawing?

Answers

1. _____

2. _____

3. _____

4. _____

5. _____

6. _____

7. _____

8. _____

9. _____

10. _____

11. _____

12. _____

**Solve each problem.**

- 1) Olivia had ten pieces of paper in her folder. She used seven pieces. How many pieces does she have now?
- 2) When Carol got to the fair she had \$8. When she left she had \$6. How much money did she spend at the fair?
- 3) A store had nine sodas. After a sale they had six left. How many did they sell?
- 4) While playing a game Frank had ten lives. He lost four lives on a hard level. How many lives does he have left?
- 5) A clown had ten balloons. He gave eight away at a party. How many balloons does he still have?
- 6) Paul had seven cherries. He ate five of them. How many cherries does Paul have left?
- 7) A store had nine sodas. If they sold seven of them, how many would they have left?
- 8) Sarah had some candy. She gave her friend four pieces and had three left. How many pieces did she have to start with?
- 9) At a bus stop three people got off the bus. Now there were three people on the bus. How many people were on the bus before?
- 10) Nancy had ten pieces of candy. She ate five pieces. How many pieces of candy does Nancy have now?
- 11) A store has ten shirts. After selling some there were three left. How many did they sell?
- 12) While playing a video game Ned lost two lives. Now he has four lives. How many lives did Ned have at the start?

Answers

1. _____

2. _____

3. _____

4. _____

5. _____

6. _____

7. _____

8. _____

9. _____

10. _____

11. _____

12. _____



Fill in the blanks to find the amounts.

Answers

Ex)

1 5

Tens Ones

Ex)

0 4

Tens Ones

1)

Tens Ones

Ex. 15

Ex. 4

2)

Tens Ones

3)

Tens Ones

4)

Tens Ones

1. _____

2. _____

3. _____

4. _____

5. _____

6. _____

7. _____

8. _____

9. _____

10. _____

5)

Tens Ones

6)

Tens Ones

7)

Tens Ones

8)

Tens Ones

9)

Tens Ones

10)

Tens Ones